

EG13-EG14 : Triangles isométriques et semblables

Exercices d'introduction

1 p 183, 15 p 185, 31 p 189

Parcours A :

A1 2 p 183, 10 p 185



A2 11 p 185



A3 27 p 187

Parcours B :

B1 3 p 183, 11 p 185



B2 27 p 187



B3 39 p 189

Parcours C :



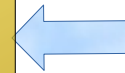
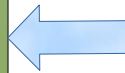
C1 27 p 187, 30 p 188



C2 39 p 189



C3 40 p 189



Exercices supplémentaires

poly